

+ or - ?

$$9 \quad 4 = 13$$

$$22 \quad 9 = 13$$

$$75 \quad 10 = 85$$

$$45 \quad 20 = 25$$

$$7 \quad 7 = 0$$

+ - or x ?

$$32 \quad 17 = 49$$


$$150 \quad 21 = 129$$

$$97 \quad 6 = 103$$

$$12 \quad 4 = 48$$

$$85 \quad 21 = 64$$

Problem: The bus had 18 people. It stopped, 6 people got off, and 10 people got on. How many are now on the bus?



1st step: Calculation needed:

2nd step: Calculation needed:

Answer to Calculation:

Answer to problem:

Problem: Sarah has 45p and Karen has 25p. How much more do they need to buy a magazine for £1?



1st step: Calculation needed:

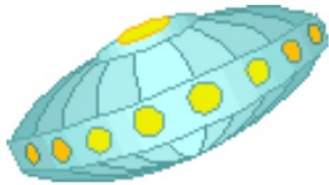
2nd step: Calculation needed:

Answer to Calculation:

Answer to problem:

How many
p (pence)
make a £
(pound)?

Problem: 20 aliens came to earth. When they drank water, they doubled! But 12 didn't like the taste and went home. How many left?

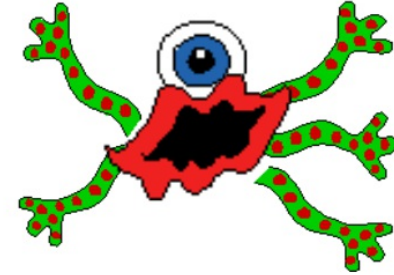


1st step: Calculation needed:

2nd step: Calculation needed:

Answer to Calculation:

Answer to problem:



Plenary

Problem:

With a partner,
make up your own
2-step problem,
solve it with the
class.

1st step: Calculation needed:

2nd step: Calculation needed:

Answer to Calculation:

Answer to problem:

Problem: _____

1st step: _____

2nd step: _____

Answer to Calculation: _____

Answer to problem: _____

Problem: _____

1st step: _____

2nd step: _____

Answer to Calculation: _____

Answer to problem: _____

Problem: _____

1st step: _____

2nd step: _____

Answer to Calculation: _____

Answer to problem: _____

Problem: _____

1st step: _____

2nd step: _____

Answer to Calculation: _____

Answer to problem: _____